

# Spindle Counting Worksheets


Match the numeral to the right quantity of spindles (0–9)

---


How to use: Read the number in each box. Draw (or lay) that many spindle lines in the tray below it.

Remember: the box for 0 stays empty — zero means none. Bundle the spindles in each box together with a ribbon.


**0** draw this many spindles ↓




**1** draw this many spindles ↓




**2** draw this many spindles ↓




**3** draw this many spindles ↓




**4** draw this many spindles ↓




**5** draw this many spindles ↓




**6** draw this many spindles ↓




**7** draw this many spindles ↓



**8** draw this many spindles ↓



**9** draw this many spindles ↓



# Spindle Counting — Write the Numeral

Count the spindles, then write how many

---

Count the spindle lines in each tray. Write the matching numeral in the box.

